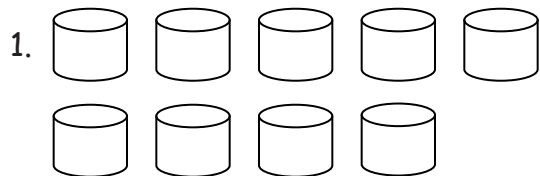


Name _____

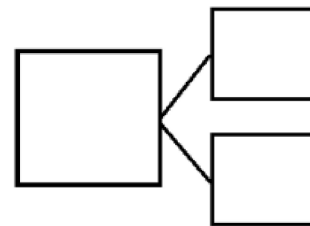
Date _____

How many objects do you see? Draw one more. How many objects are there now?



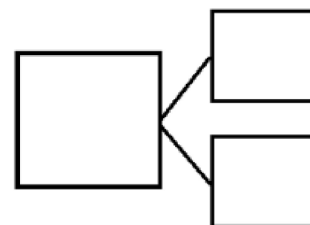
1 more than 9 is ____.

$9 + 1 = \underline{\hspace{2cm}}$




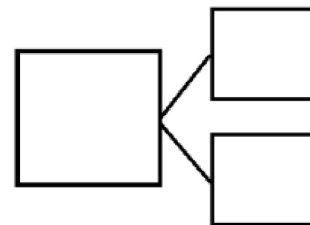
____ is 1 more than 7.

$\underline{\hspace{2cm}} = 7 + 1$



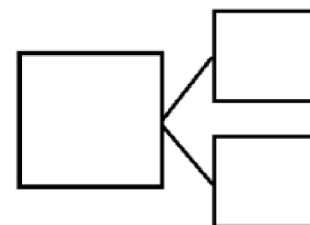
____ is 1 more than 5.

$\underline{\hspace{2cm}} = 5 + 1$



1 more than 8 is ____.

$\underline{\hspace{2cm}} + 1 = \underline{\hspace{2cm}}$

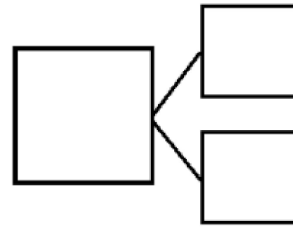


5. Imagine adding 1 more pencil to the picture. Then write the numbers to match how many pencils there will be.



1 more than 5 is _____.

$5 + 1 =$ _____



6. Imagine adding 1 more flower to the picture. Then write the numbers to match how many flowers there will be.



_____ is 1 more than 8.

_____ + 1 = _____

