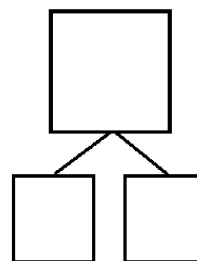
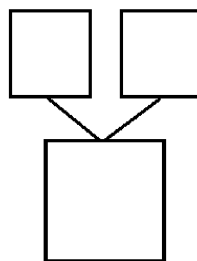
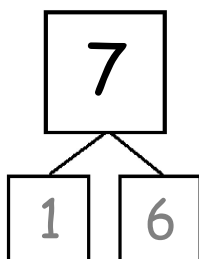
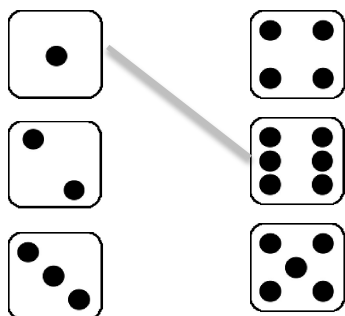


Name \_\_\_\_\_

Date \_\_\_\_\_

1. Match the dice to show different ways to make 7. Then draw a number bond for each pair of dice.

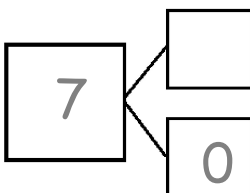


2. Make 2 number sentences. Use the number bonds above for help.

$$\square + \square = 7$$

$$7 = \square + \square$$

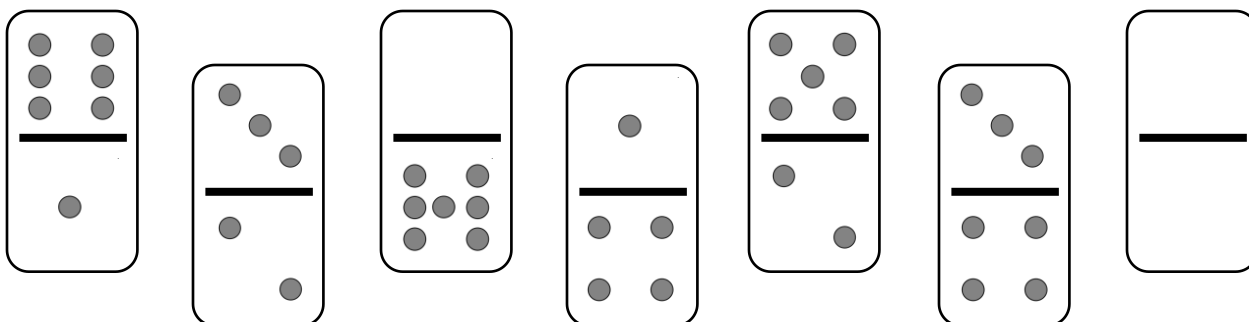
3. Fill in the missing number from the number bond. Then write more addition sentences for the number bond you made.



$$7 = \square + \square$$

$$7 = \square + \square$$

4. Color the dominoes that make 7.



5. Complete the number bonds for the dominoes you colored.

