

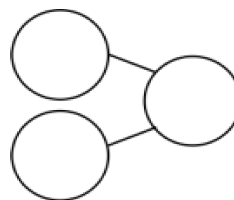
Name _____

Date _____

Solve the number sentences. Use number bonds to show your thinking. Write the 10+ fact and new number bond.

1. $9 + 6 = \underline{\quad}$

$10 + \underline{\quad} = \underline{\quad}$



2. $9 + 8 = \underline{\quad}$

$\underline{\quad} + \underline{\quad} = \underline{\quad}$

3. $5 + 9 = \underline{\quad}$

$\underline{\quad} + \underline{\quad} = \underline{\quad}$

4. $7 + 9 = \underline{\quad}$

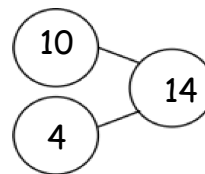
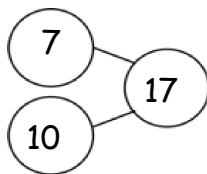
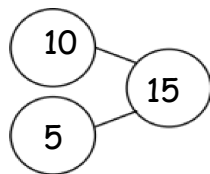
$\underline{\quad} + \underline{\quad} = \underline{\quad}$

5. Solve. Match the number sentence to the 10+ number bond.

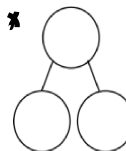
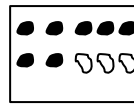
a. $9 + 5 = \underline{\quad}$

b. $9 + 6 = \underline{\quad}$

c. $9 + 8 = \underline{\quad}$



Use an efficient strategy to solve the number sentences.



6. $9 + 7 = \underline{\quad}$

7. $9 + 2 = \underline{\quad}$

8. $9 + 1 = \underline{\quad}$

9. $8 + 9 = \underline{\quad}$

10. $4 + 9 = \underline{\quad}$

11. $9 + 9 = \underline{\quad}$