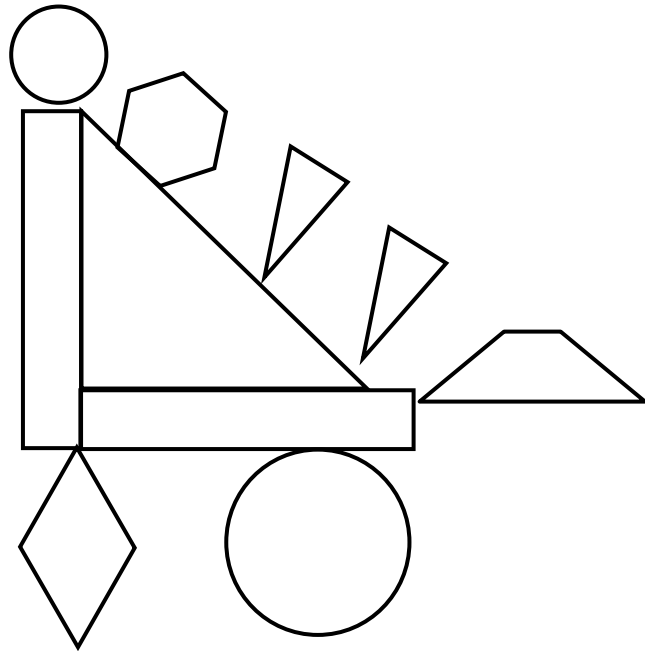


Name \_\_\_\_\_

Date \_\_\_\_\_

1. Color the shapes using the key. Write the number of shapes you colored on each line.

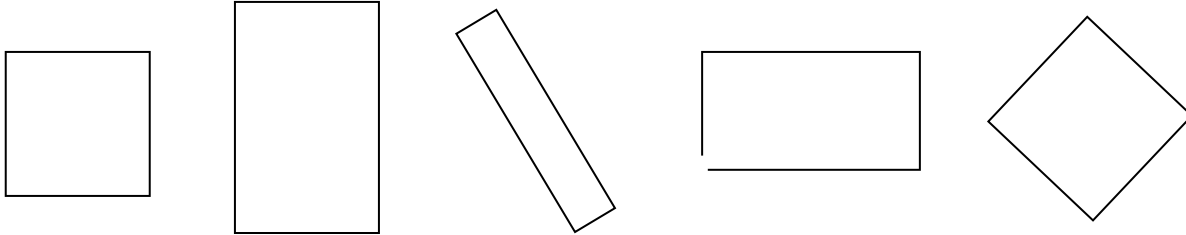
Key	
RED	3 straight sides: _____
BLUE	4 straight sides: _____
GREEN	6 straight sides: _____
YELLOW	1 curved side: _____



- 2.
- A **triangle** has \_\_\_\_\_ straight sides and \_\_\_\_\_ corners.
  - I colored \_\_\_\_\_ triangles.
- 3.
- A **hexagon** has \_\_\_\_\_ straight sides and \_\_\_\_\_ corners.
  - I colored \_\_\_\_\_ hexagon.
- 4.
- A **circle** has \_\_\_\_\_ straight sides and \_\_\_\_\_ corners.
  - I colored \_\_\_\_\_ circles.
- 5.
- A **rhombus** has \_\_\_\_\_ straight sides that are equal in length and \_\_\_\_\_ corners.
  - I colored \_\_\_\_\_ rhombuses.

6. A **rectangle** is a closed shape with 4 straight sides and 4 square corners.

a. Cross off the shape that is NOT a rectangle.

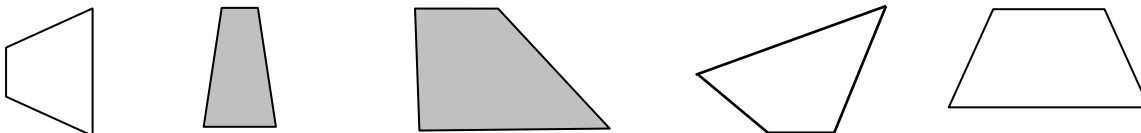


b. Explain your thinking: \_\_\_\_\_

\_\_\_\_\_

7. A **trapezoid** is a closed shape with 4 straight sides with at least 2 of those sides the same distance apart across the length of the side.

a. Cross off the shape that is NOT a trapezoid.



b. Explain your thinking: \_\_\_\_\_

\_\_\_\_\_