

Name: _____

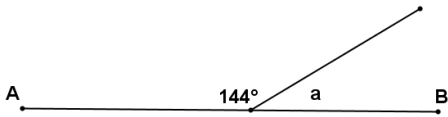
Date: _____ Period: _____

Module 1: Lesson 6

Homework

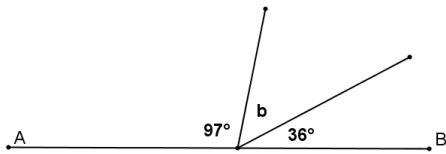
Find the measure of each marked angle.

1.



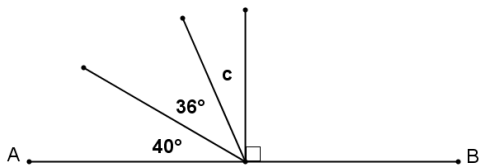
$m\angle a = \underline{\hspace{2cm}}$

2.



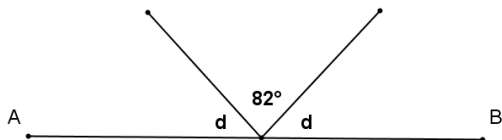
$m\angle b = \underline{\hspace{2cm}}$

3.



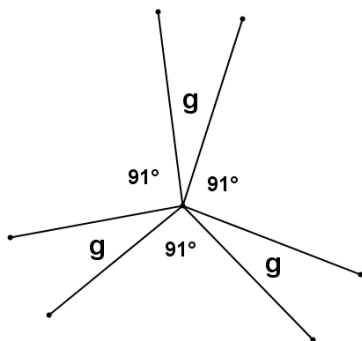
$m\angle c = \underline{\hspace{2cm}}$

4.



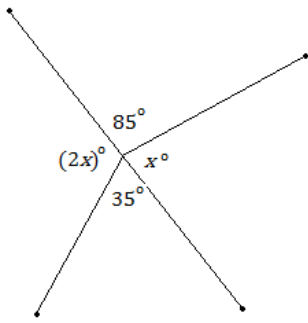
$m\angle d = \underline{\hspace{2cm}}$

5.



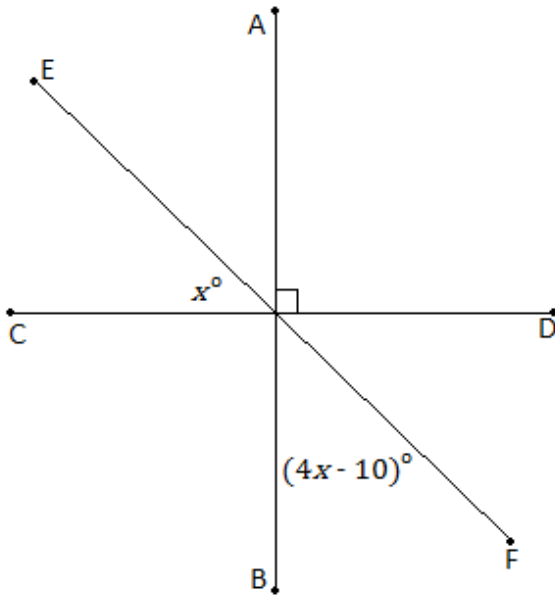
$m\angle g = \underline{\hspace{2cm}}$

6.



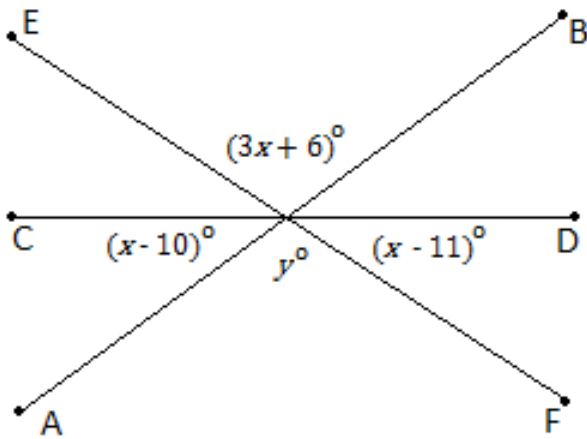
$x =$ _____

7.



$x =$ _____

8.



$x =$ _____

$y =$ _____